

5. Jacqueline paid \$384 for 8 similar pens and 4 similar textbooks. The 8 pens cost \$180. How much did each textbook cost?

- (1) \$51 (2) \$56
(3) \$104 (4) \$204

Section B

II. For each question, write your answer in the space provided. Give your answer in the unit stated. (14 X 2 Marks)

6.

$$+ \boxed{}$$

$$6433 \text{ -----} > 6515$$

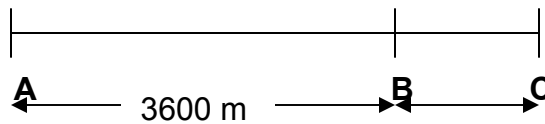
7. 840 tens \div 6 = 1 thousand + _____ hundreds

8. The sum of 5 five-cent coins, 9 twenty-cent coins and 5 fifty-cent coins is \$_____.

9. 820 g more than 3 kg 450 g is _____g.

10. 6 km 30 m is the same as _____m.

11.

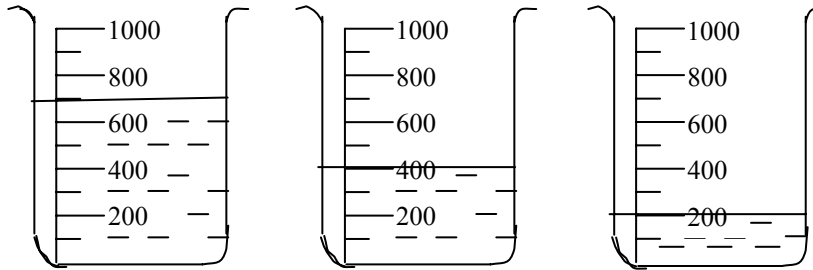


The distance between A and B is 3 times the distance between B and C.
What is the distance from A to C?
(Give your answer in km and m.)

12. $4 \text{ l } 70 \text{ ml} - 2 \text{ l } 80 \text{ ml} = \underline{\hspace{2cm}}$.

l	ml
------------	-------------

13. What is the total amount of water in the three beakers?



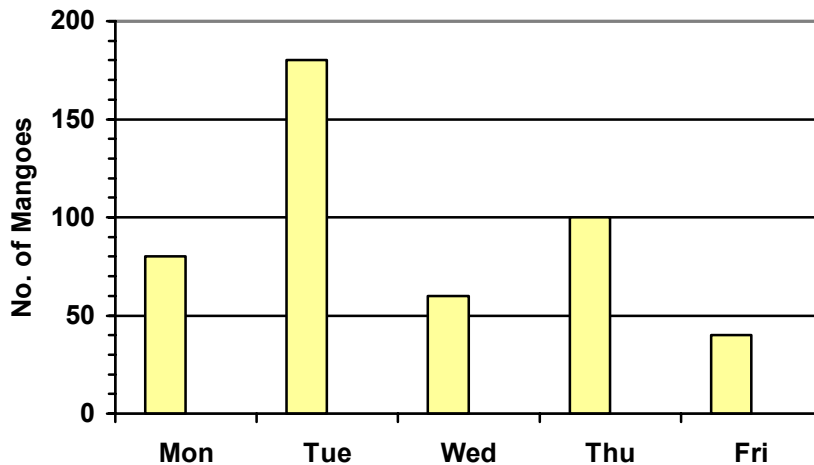
l	ml
------------	-------------

14. The capacity of a big fish tank is 920 litres. The capacity of a pail is 8 litres. How many pails of water are needed to fill the fish tank completely?

pails

The graph below shows the number of mangoes sold from Monday to Friday. Study it carefully and answer questions 15 to 17.

Sales of Mangoes



15. The number of mangoes sold on _____ is twice the number of mangoes sold on Friday.

--

16. _____ more mangoes were sold on Tuesday than Wednesday.

17. _____ mangoes were sold for the week.

18. Aunt Mary bought some chocolates. After packing them equally into 9 jars, she had 3 chocolates left. If each jar had 52 chocolates, how many chocolates did she buy?

19. Jeff has four times as many toy planes as toy ships. If he has 285 toy planes and toy ships altogether, how many toy ships does he have?

Section C (12 Marks)

III. For each question, show your working clearly in the space below each question and write your answers in the spaces provided. The mark for each question is given in the brackets.

20. Uncle Jim bought a new house with a garden of 5800 square feet. He uses 984 square feet of his garden to build a playground and three times as many square feet to build a swimming pool. How many square feet of his garden were left?

Ans: _____ square feet (3 Marks)

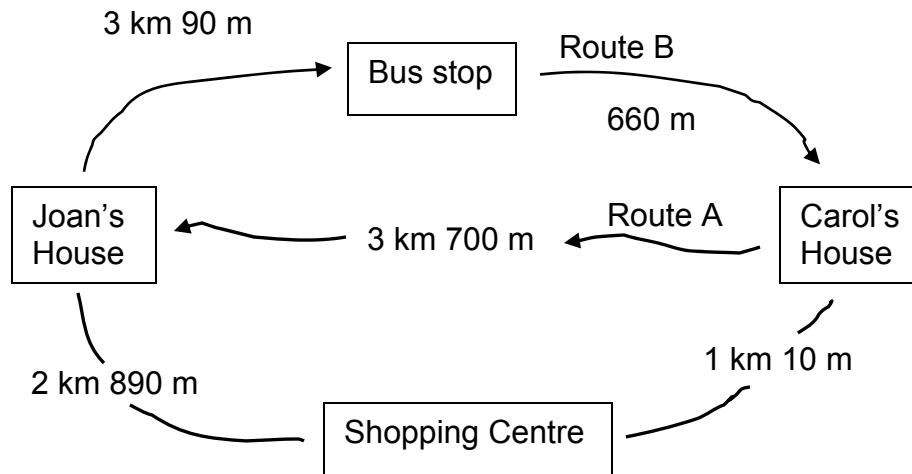
21. A bottle has 600 ml of water. When $3\ 690 \text{ ml}$ of water is poured into it, $2 \text{ l } 30 \text{ ml}$ of water overflowed. What is the capacity of the bottle?
(Give your answer in l and ml .)

Answer: _____ l _____ ml (3 Marks)

22. Hammers A, B and C weigh a total of 5 kg 58 g. Hammer A weighs five times as heavy as Hammer B. Hammer C is thrice as heavy as Hammer B. What is the weight of Hammer C?

Answer: _____ g (3 Marks)

23. The map below shows Joan's house, Carol's house, a bus stop, a shopping centre. Study the map carefully and answer the questions below.



- a) How much further is the shopping centre from Joan's house than Carol's house?

Answer: _____ m (1 Mark)

- b) On Sunday, Carol went to Joan's house by Route A and came home by Route B. What was the total distance travelled by her on that day? (Give your answer in km and m.)

Answer: _____ km _____ m (2 Marks)