

Tao Nan School

Primary Two Mathematics Mid-Year Practice Paper 2007

Name: _____ () Date: _____
Class: P2 () Duration: _____
Parent's Signature: _____ Marks: /100

Section A: (20 X 2 marks)

Choose the correct answer and write its number in the brackets.

1. The value of the digit "1" in 168 is _____.

- (1) 1
- (2) 10
- (3) 100
- (4) 1000

()

2. 9 ones, 3 tens and 4 hundreds is the same as _____.

- (1) 349
- (2) 439
- (3) 493
- (4) 934

()

3. $72 + 38 =$ _____ tens

- (1) 10
- (2) 11
- (3) 100
- (4) 110

()

4. 4 groups of 3 is the same as _____.

- (1) $3 + 3 + 3$
- (2) $4 + 4 + 4$
- (3) $3 + 3 + 3 + 3$
- (4) $4 + 4 + 4 + 4$

()

5. A basket of apples has a mass of 2 kg.
_____ baskets of apples have a mass of 10 kg.

- (1) 20
- (2) 12
- (3) 8
- (4) 5

()

6. Subtract 167 from 900. The answer is _____.

- (1) 733
- (2) 743
- (3) 747
- (4) 867

()

7. $290 = \underline{\hspace{2cm}} + 140$

- (1) 430
- (2) 150
- (3) 100
- (4) 50

()

8. The sum of 416 and 255 is .

- (1) 161
- (2) 261
- (3) 661
- (4) 671

()

9. - 259 = 588.

- (1) 847
- (2) 837
- (3) 329
- (4) 331

()

10. is 100 less than 502.

- (1) 602
- (2) 512
- (3) 492
- (4) 402

()

11. 802 is _____ more than 792.

- (1) 10
- (2) 20
- (3) 90
- (4) 100

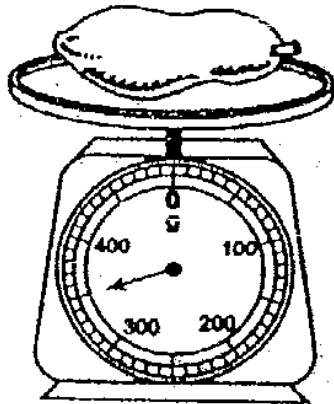
()

12. There are _____ threes in twenty-seven.

- (1) 6
- (2) 7
- (3) 8
- (4) 9

()

13. The mass of the papaya is _____ g.



- (1) 305
- (2) 340
- (3) 350
- (4) 360


()

14. $12 \div 2$ has the same value as _____.

- (1) 2×2
- (2) 2×6
- (3) 3×2
- (4) 3×4

()

15. Measure the length of the pencil with your ruler.



It is about _____ cm long.

- (1) 6
- (2) 7
- (3) 8
- (4) 9

()

16. Study the number pattern below.

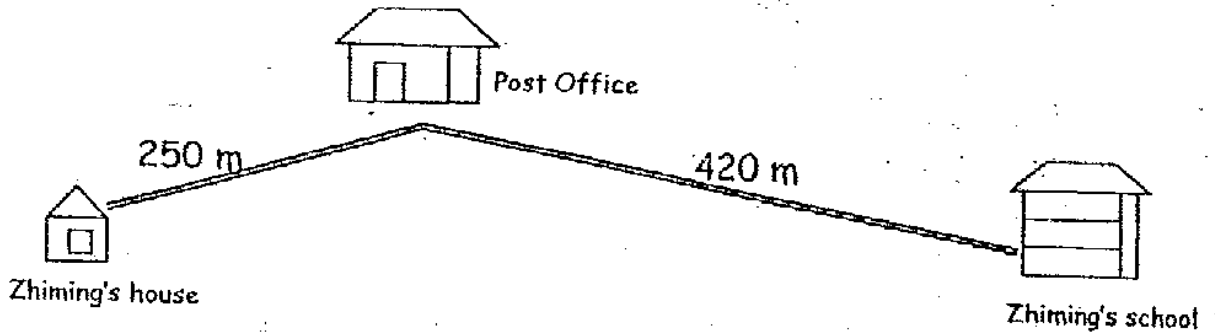
15, 18, 21, _____, 27.

The missing number is _____.

- (1) 23
- (2) 24
- (3) 25
- (4) 26

()

17. The total distance that Zhiming has to travel from his house to his school is _____ m.



- (1) 250
- (2) 270
- (3) 420
- (4) 670

()

18. Alice puts 3 stalks of flowers in each vase.
There are _____ stalks of flowers in 6 vases.

- (1) 9
- (2) 17
- (3) 18
- (4) 19

()

19. If $\text{☺} + \text{☺} + \text{☺} + \text{☺} + \text{☺}$ is 15, then _____ is 9.

- (1) ☺
- (2) $\text{☺} + \text{☺}$
- (3) $\text{☺} + \text{☺} + \text{☺}$
- (4) $\text{☺} + \text{☺} + \text{☺} + \text{☺}$

()

20. $\triangle \times \triangle = 4$

$\star \times \triangle = 18$

The value of \star is _____

(1) 16

(2) 2

(3) 9

(4) 4

()

Section B: (20 X 2 marks)

Fill in the blanks with the correct answers.

21. Write 719 in words.

22. The value of 4×2 is _____

23.
$$\begin{array}{r} 3 \quad 5 \quad 3 \\ - 1 \quad 1 \quad 9 \\ \hline \end{array}$$

24.
$$\begin{array}{r} 5 \quad 4 \quad 7 \\ + 2 \quad 0 \quad 4 \\ \hline \end{array}$$

25. The value of 5 groups of 3 is _____.


26. The smallest 3-digit number that can be formed from 5, 6 and 3 is

_____.

27. The missing number in the box is _____.

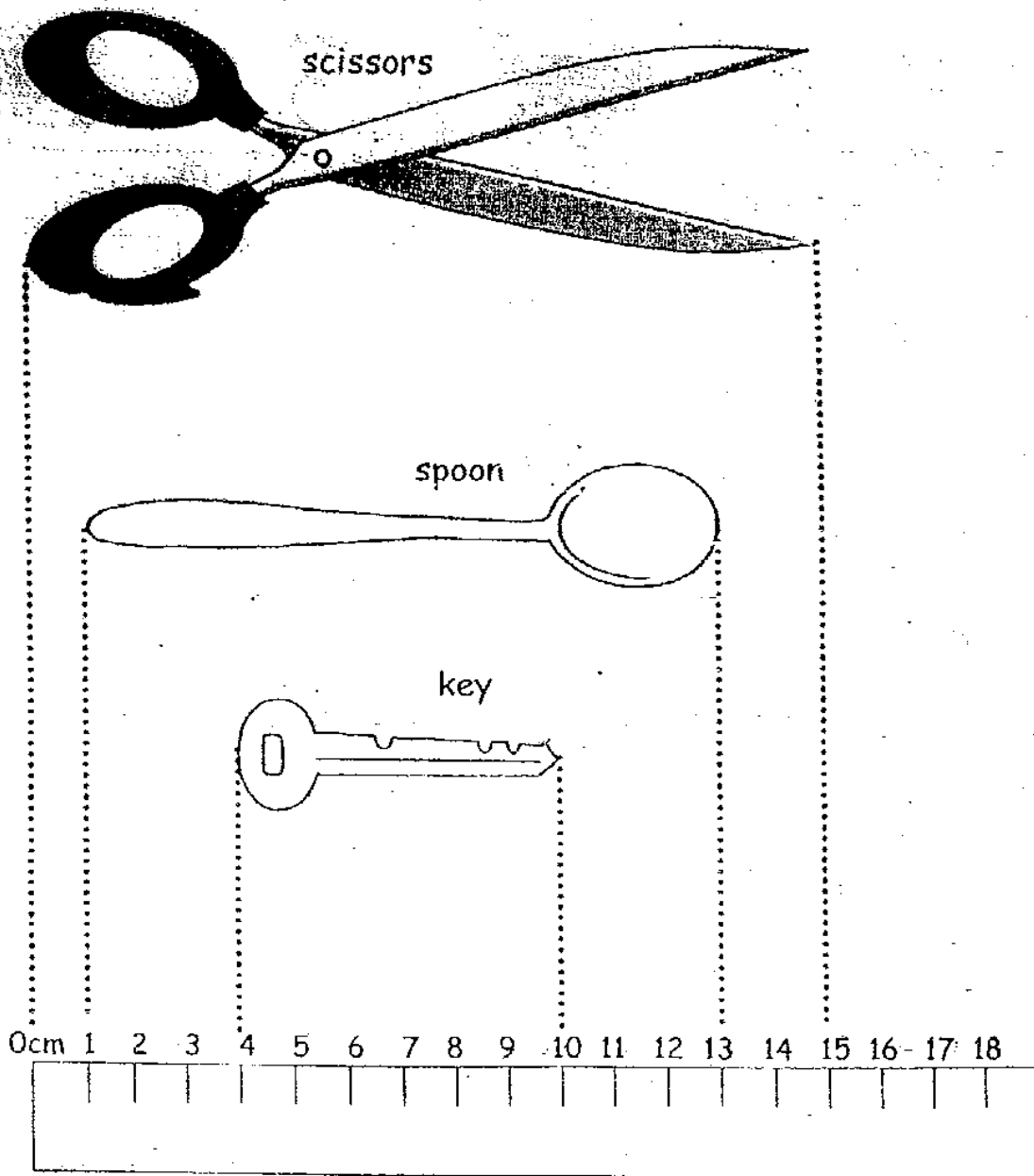
$$\begin{array}{r} 4 \quad 0 \quad 1 \\ - 1 \quad \boxed{?} \quad 8 \\ \hline 2 \quad 1 \quad 3 \end{array}$$

28. Ring the following snowmen into 6 equal groups.



There are _____ snowmen in each group.

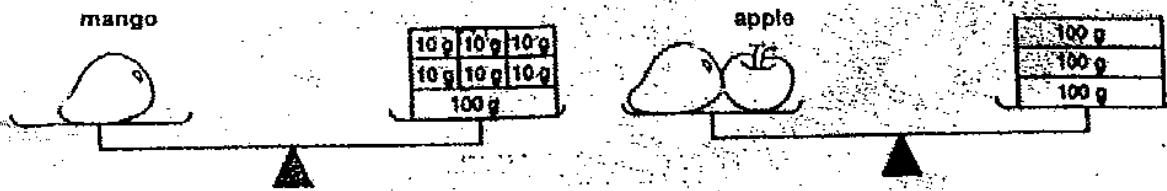
Study the length of the objects below and answer Questions 29 and 30.



29. The length of the key is _____ cm

30. The pair of scissors is _____ cm longer than the spoon.

Study the scales below and answer Questions 31 and 32.



31. The mass of the apple is _____ g.

32. The mango is _____ g heavier than the apple.

33. $30 \div 3 = 2 \times$ _____

34. 5 tens = _____ groups of 5.

35. 3 apples cost \$2.



6 apples cost \$ _____

36. Complete the multiplication sentence and the division sentence below.




$$\begin{array}{r} 3 \\ \hline \end{array} \times \begin{array}{r} \\ \hline \end{array} = \begin{array}{r} \\ \hline \end{array}$$

$$\begin{array}{r} \\ \hline \end{array} \div \begin{array}{r} 3 \\ \hline \end{array} = \begin{array}{r} \\ \hline \end{array}$$

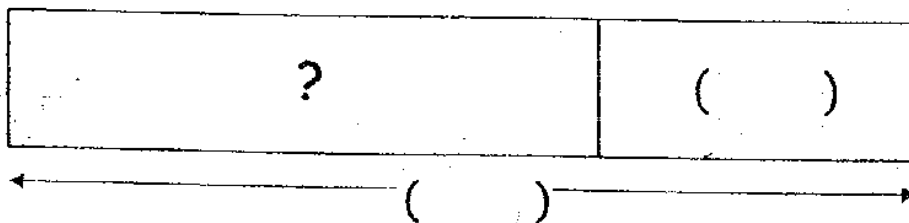
For Questions 37 and 38, write your answers in the brackets and blanks provided.

37. Lina collected 82 stamps and her sister collected 25 stamps.
How many stamps did they collect altogether?



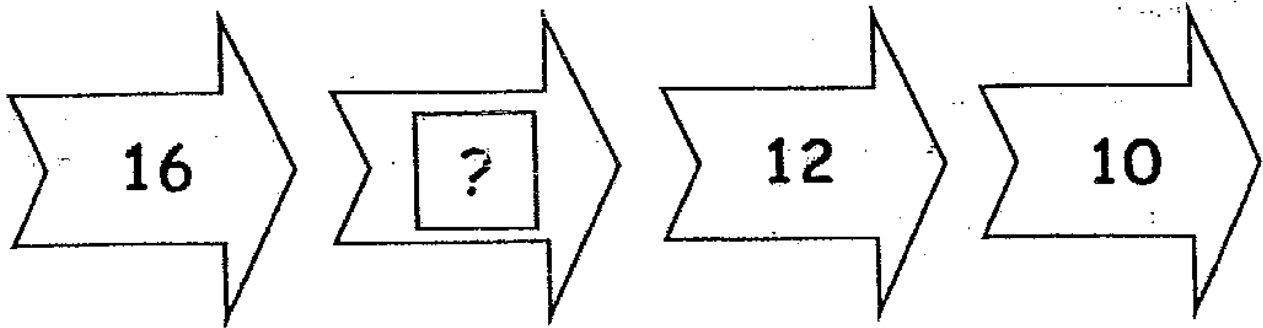
They collected _____ stamps altogether.

38. Mrs Lim baked 145 tarts.
After giving 40 tarts to Annie, how many tarts had she left?



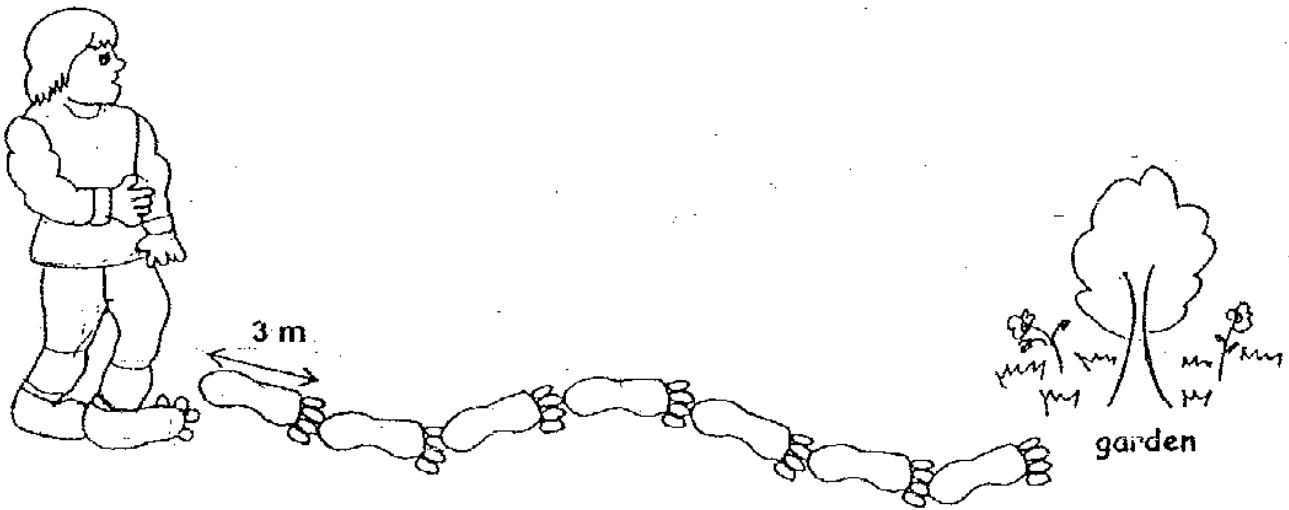
She had _____ tarts left.

39. Complete the number pattern.



The missing number in the box is _____.

40. Look at the giant's foot paces below. Each foot pace is 3 m long.
The giant has to take about 7 foot paces to reach the garden.



The garden is _____ m away from the giant.

Section C (5 X 4 marks)

Read the story sums carefully. Show all number sentences, statements and workings clearly.

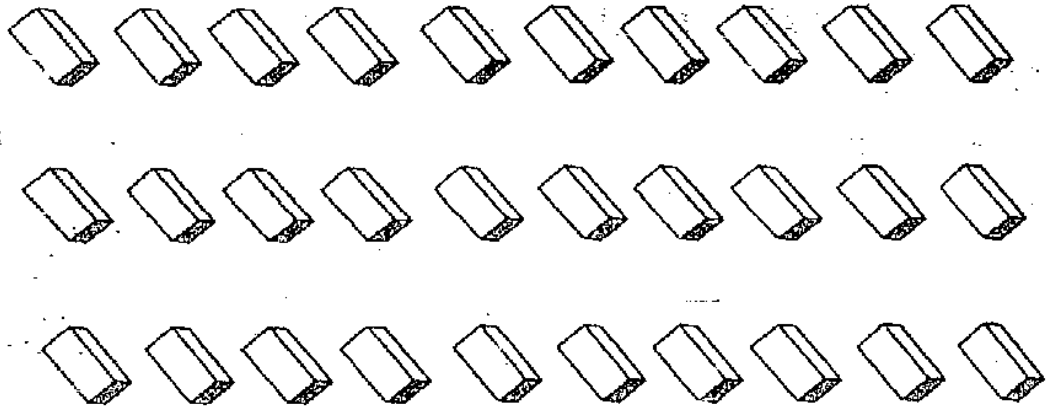
41. Mary has 2 baskets.
She puts 10 balls into each basket.
How many balls are there altogether?

There are _____ balls altogether.

42. Ryan has a mass of 36 kg.
His brother's mass is 40 kg and his sister has a mass of 19 kg.
What is their total mass?

Their total mass is _____ kg.

43. Sue and her 2 friends shared 30 erasers equally among themselves.
How many erasers did each child get?



Each child got _____ erasers.

44. Rosie had a piece of ribbon 350 cm long.
She used some of it and had 175 cm of the ribbon left.
What was the length of the ribbon that was used?

The length of the ribbon that was used was _____ cm.

45. John sold 245 fish on Saturday.
He sold 48 fewer fish on Saturday than on Sunday.
How many fish did he sell on Sunday?

He sold _____ fish on Sunday.

----- End of Paper -----

ANSWER SHEET

NAN HUA PRIMARY SCHOOL - PRIMARY 2 MATHEMATICS 2007
SEMESTRAL ASSESSMENT (1)

1. 3
2. 2
3. 2
4. 3
5. 4
6. 1
7. 2
8. 4
9. 1
10. 4
11. 1
12. 4
13. 3
14. 3
15. 4
16. 2
17. 4
18. 3
19. 3
20. 3
21. seven hundred and nineteen
22. 8
23. 234
24. 751
25. 15
26. 356
27. 8
28. 5
29. 6
30. 3
31. 140
32. 20
33. 5
34. 10
35. 4
36. $3 \times 4 = 12$
 $12 \div 3 = 4$

38.

?	(40)
---	------

 $\xleftarrow{(145)} \quad \xrightarrow{\hspace{10em}}$
 $145 - 40 = 105$

She had 105 tarts left.

39. 14

40. $3 \times 7 = 21$

41. $2 \times 10 = 20$

There are 20 balls altogether.

42. $36 + 40 + 19 = 95$

Their total mass is 95 kg.

43. $30 \div 3 = 10$

Each child got 10 erasers.

44. $350 - 175 = 175$

the length of the ribbon that was used was 175cm.

45. sat

245	← 48 →

sun

$245 + 48 = 293$

He sold 293 fish on Sunday.

37.

(82)	(25)
--------	--------

$82 + 25 = 107$

They collected 107 stamps altogether